


Leabhar Gníomhaíochta don tSeachtain Mata

Lúbraí
Cothromóidí pictiúir
Tomhais
Puzail focail
Briseadh an Chóid



Seachtain Mata
12ú-20ú Deireadh Fómhair

SEACHTAIN MATA



**SE
TU**

Ollscoil
Teicneolaíochta
an Oirdheiscirt
South East
Technological
University



CALMAST
STEM ENGAGEMENT CENTRE

libraries.
fingal.ie



Space for logo

Cothromóidí Pictiúir



ISa leabharlann, tá roinnt cothromóidí pictiúir déanta againn. Féach an féidir leat teacht ar luachanna na siombailí agus an ? sna puzail seo a leanas.

$$\text{Book with stars} + \text{Book with stars} = 8$$

$$\text{Pencil} + \text{Book with stars} = 7$$

$$\text{Pencil} + \text{Book with lines} = 5$$

$$\text{Book with stars} + \text{Book with lines} = ?$$

$$\text{Book with stars} + \text{Book with stars} = 10$$


$$\text{Pencil} + \text{Book with stars} = 8$$

$$\text{Book with stars} - \text{Book with lines} = 1$$

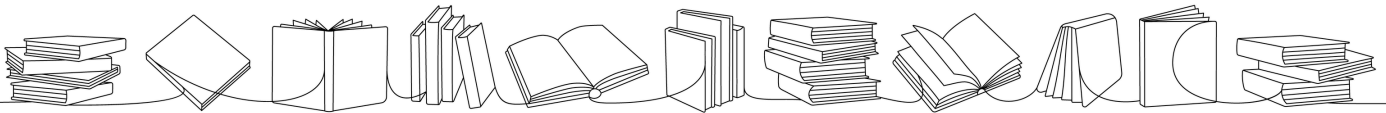
$$\text{Book with stars} \times \text{Pencil} = ?$$



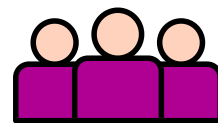
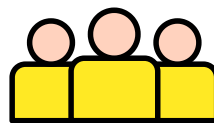
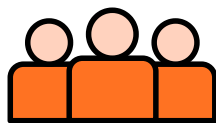
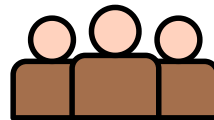
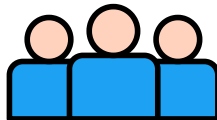
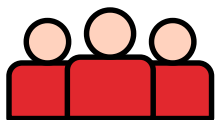
Puzail Phictiúir




Tagann Liam, Sinéad, Luke agus Amy le chéile le haghaidh an Chlub Leabhar ag an leabharlann. Croitheann gach duine lámh le gach duine eile uair amháin. Cé mhéad croitheadh láimhe atá ann san iomlán?



Ttá 6 fhoireann - dearg, gorm, donn, oráiste, buí agus corcra - ag imirt cluichí mata sa leabharlann. Imríonn gach foireann i gcoinne gach foireann eile dhá uair. Cé mhéad cluiche atá ann san iomlán?




Bristeoir an Chóid Rúnda




An féidir leat an cód a bhriseadh?

Bris an cód chun an teachtaireacht rúnda ón leabharlann thíos a dhéanamh amach

	A		N
	B		O
	C		P
	D		Q
	E		R
	F		S
	G		T
	H		U
	I		V
	J		W
	K		X
	L		Y
	M		Z

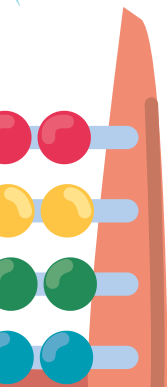



Mata agus Ealaín




Tá go leor nasc idir Mata agus Ealaín. An féidir leat dath a chur sa phatrún thíos ionas nach roinnfidh aon limistéar imeall le limistéar den dath céanna?

An féidir é seo a dhéanamh gan ach 4 dhath a úsáid?



Puzail focal agus litreacha



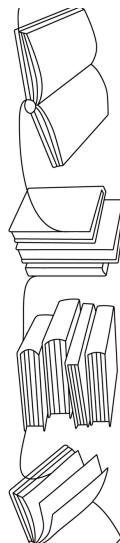
Tá aon litir déag ar iarraidh sa chearnóg seo. Caithfidh tú iad a athsholáthar. Ní mór na litreacha go léir atá san focal "LÉAMH" a bheith i ngach sraith, colún AGUS sna príomhthrasnáin.

LÉAMH CEARNÓIGE

L	É	A	M	H
	H	L	É	
		M		L
	L	É		
		H	L	

SÚILE LEABHARLAINNE

Leagann tú cathaoir sa leabharlann, agus go tobann tá 20 súil ag féachaint ort. Cé mhéad duine atá sa leabharlann?




FOCAIL A DHÉANAMH

Tá roinnt litreacha tar éis snámh amach as an leabhar! Cé mhéad focal is féidir leat a dhéanamh as na litreacha seo i gceann cúig nóiméad? Is féidir leat an litir chéanna a úsáid i bhfocal níos mó ná uair amháin.e.

A, E, I, O, U, H, B, M, T, S, L,
Á, É, Í, Ó, Ú, R, D




Tomhais



Thug rang amháin cuairt ar an leabharlann. Cailleadh trí cheathrú díobh sa choill. Níor shroich ach 6 an leabharlann. Sa deireadh fuair siad go léir a mbealach ar ais go dtí an bus. Cé mhéad páiste a bhí sa rang?

Bhí _____ páiste sa rang.



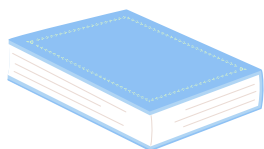
Chuir an leabharlannaí leabharmharcanna i bhfolach i leabhair éagsúla! Cén leabhar a roghnóidh tú chun an oiread leabharmharcanna agus is féidir a bheith agat?



Tá dhá oiread níos mó ná 3 ag an gceann dearg



Tá trí oiread níos mó ná 2 ag an gceann glas




Tá leath de 14 ag an gceann gorm



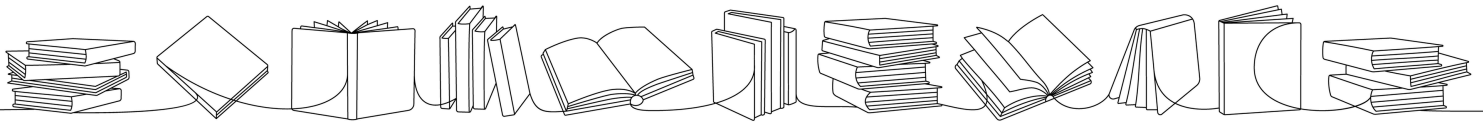

Tá an tríú chuid de 15 ag an gceann buí





NA LÚBRAÍ IS IONTAÍ!




An féidir leat cabhrú leis an gcailín a bealach a dhéanamh tríd an lúbra go dtí an leabharlann?



Caithfidh an buachaill dul tríd an lúbra chun teacht ar a chuid leabhar!
An féidir leat cabhrú leis an bealach a aimsiú?



Suimeanna Datha



$4 + 3$


5×2

$6 + 5$

$10 - 1$

4×2

Cabraigh leis an leabharlannaí na leabhair a dhathú. Déan an mata agus dathaigh gach leabhar leis an dath ceart. Bain úsáid as an gcód thíos.





Comhghairdeas! Tá ár Leabhar Gníomhaíochta Mata críochnaithe agat!

**Chun tuilleadh eolais a fháil faoi
Sheachtain Mata tabhair cuairt ar
an suíomh gréasáin
<https://www.mathsweek.ie/2024/>**

Nó scan an cód QR thíos:

